


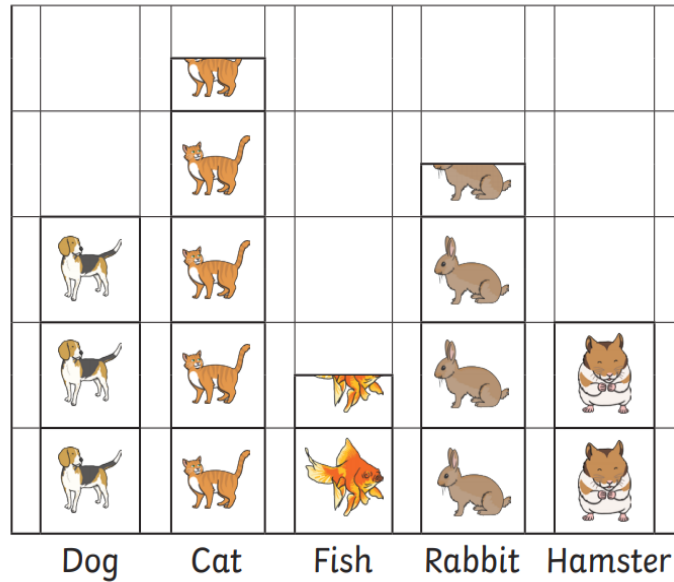


Interpreting Scaled Pictograms

Learning Objective: I can interpret scaled pictograms

 = 2 children
 = 2 children
 = 2 children
 = 2 children
 = 2 children

Class Pets



Answer the following questions.

Which is the most common pet? _____

How many pets are there in class? _____

How many more rabbits than hamsters are there? _____

How many fewer dogs than cats are there? _____

Write your own questions for a friend.

Answers

Class Pets

Which is the most common pet? **cat**

How many pets are there in the class? **29**

How many more rabbits than hamsters are there? **3**

How many fewer dogs than cats are there? **3**