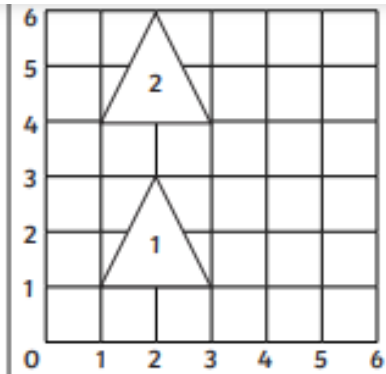


Friday Something Easier

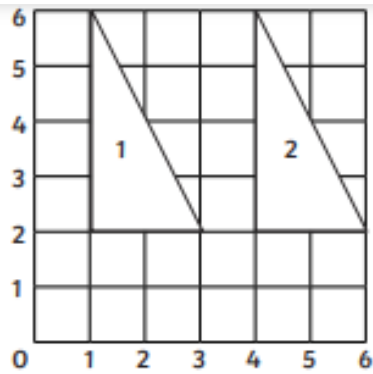
Can you write in the co-ordinates for position 1 and 2 for each shape? Then if you can, try and describe each translation. Go back to the video if you need reminding.



Starting Coordinates:

Translation:

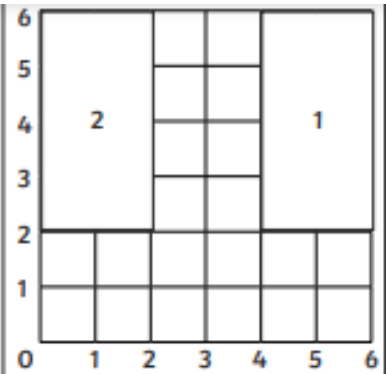
Finishing Coordinates:



Starting Coordinates:

Translation:

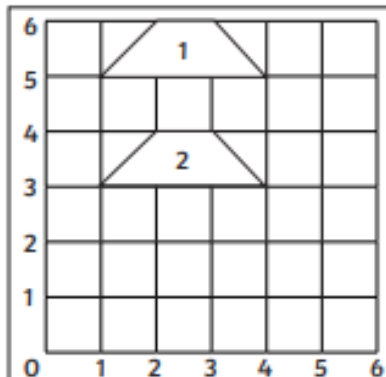
Finishing Coordinates:



Starting Coordinates:

Translation:

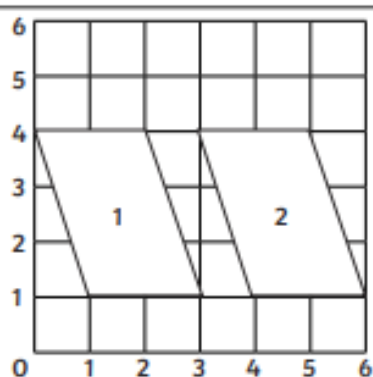
Finishing Coordinates:



Starting Coordinates:

Translation:

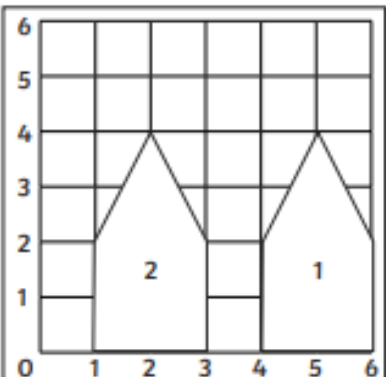
Finishing Coordinates:



Starting Coordinates:

Translation:

Finishing Coordinates:



Starting Coordinates:

Translation:

Finishing Coordinates: