


DRAW LINE GRAPHS



GET READY



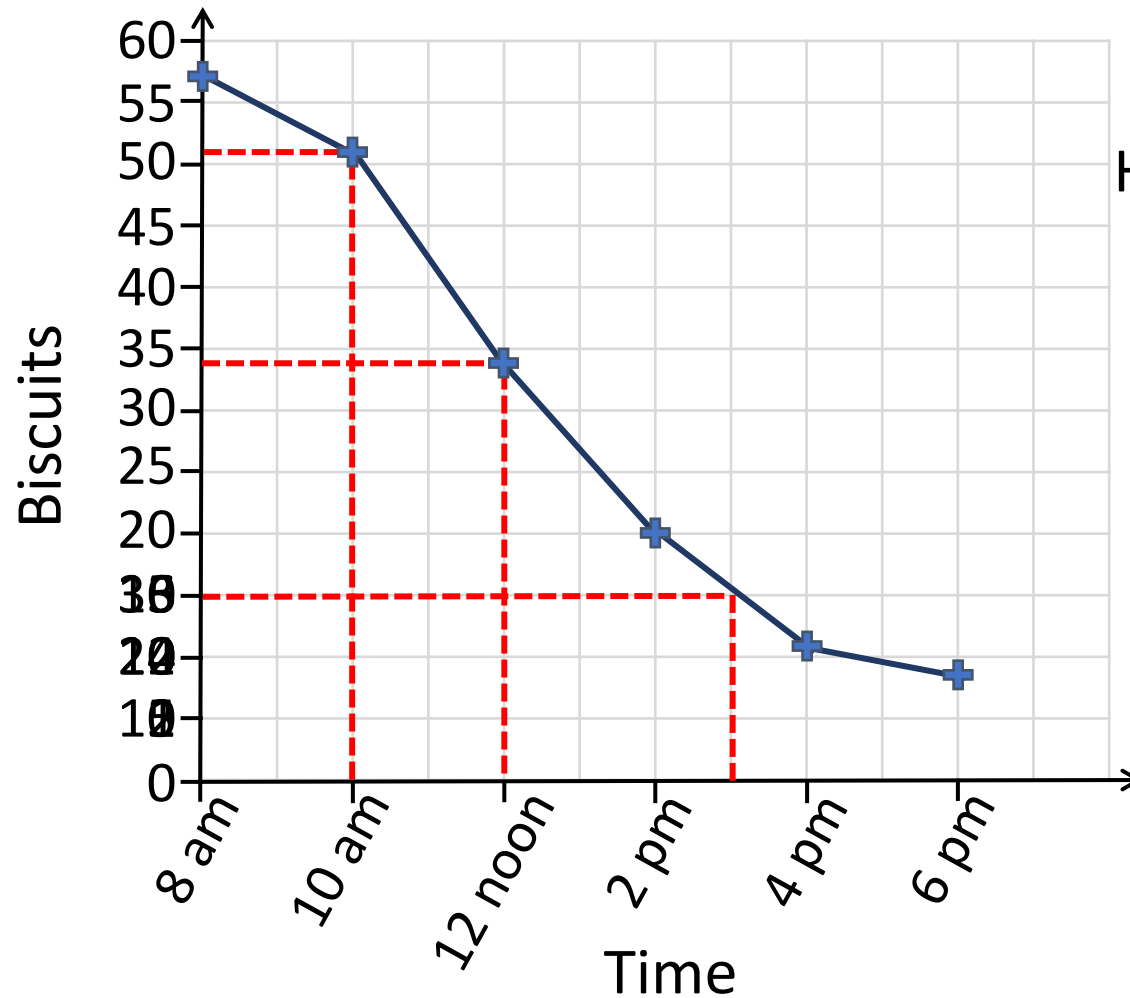
- 1) What is the sum of 31 and 79?
- 2) What is the difference between 31 and 79?
- 3) Round 73,499 to the nearest 10,000
- 4) Round 73,967 to the nearest 100

- 1) What is the sum of 31 and 79?
110
- 2) What is the difference between 31 and 79?
48
- 3) Round 73,499 to the nearest 10,000
70,000
- 4) Round 73,967 to the nearest 100
74,000

LET'S LEARN



Time	8 am	10 am	12 noon	2 pm	4 pm	6 pm
Biscuits in staff room	57	51	34	20	11	8



Have a think

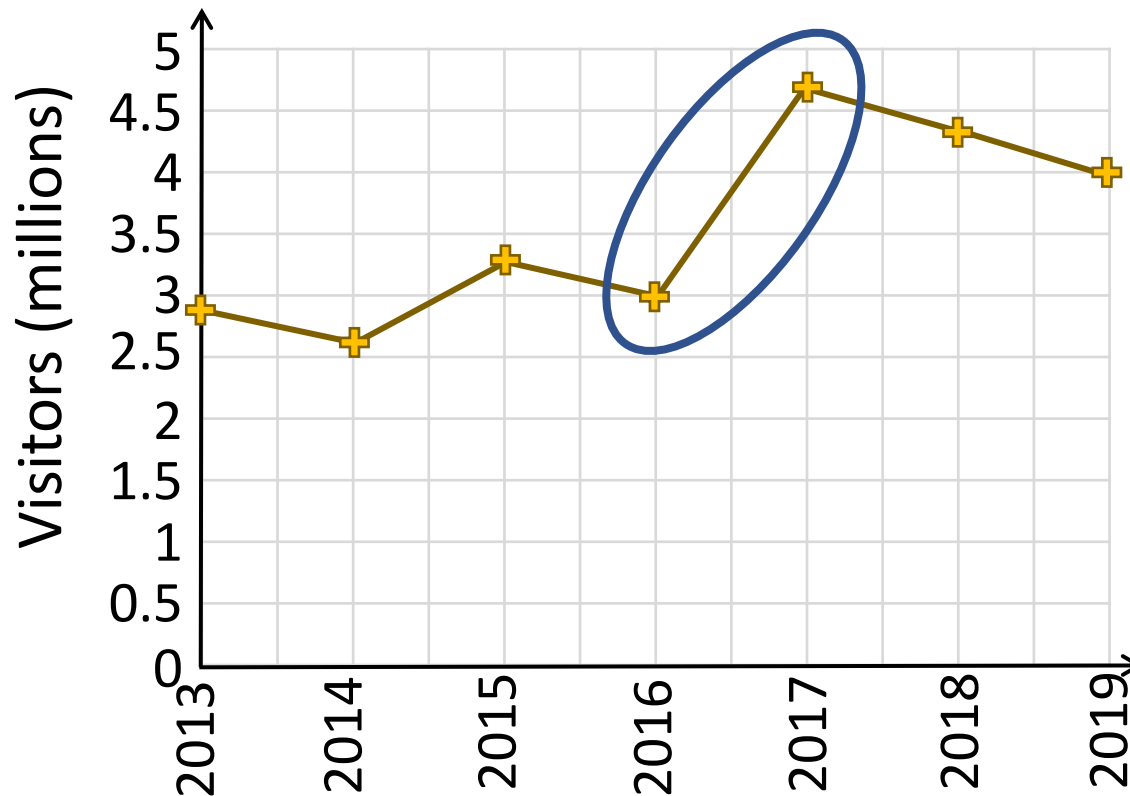


Estimate the
number of
biscuits at 3 pm.

15

Year	2013	2014	2015	2016	2017	2018	2019
Visitors (millions)	2.9	2.6	3.3	3	4.7	4.4	4

2.6 million = 2,600,000

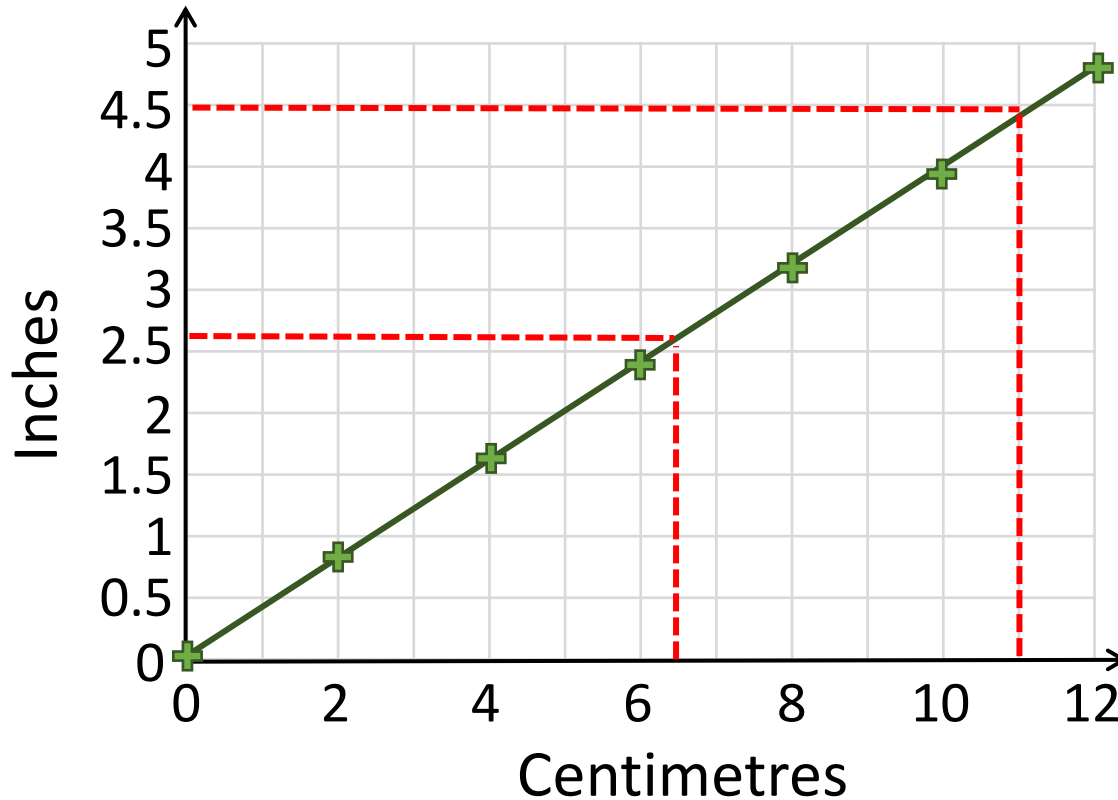


Have a think

In what year do
you think a new
exhibit was
opened?

2017

Centimetres	0	2	4	6	8	10	12
Inches	0	0.8	1.6	2.4	3.1	3.9	4.7



Have a think

- 1) How many inches are equal to 6.5 cm? 2.6 inches
- 2) What is 4.5 inches in centimetres? 11 cm

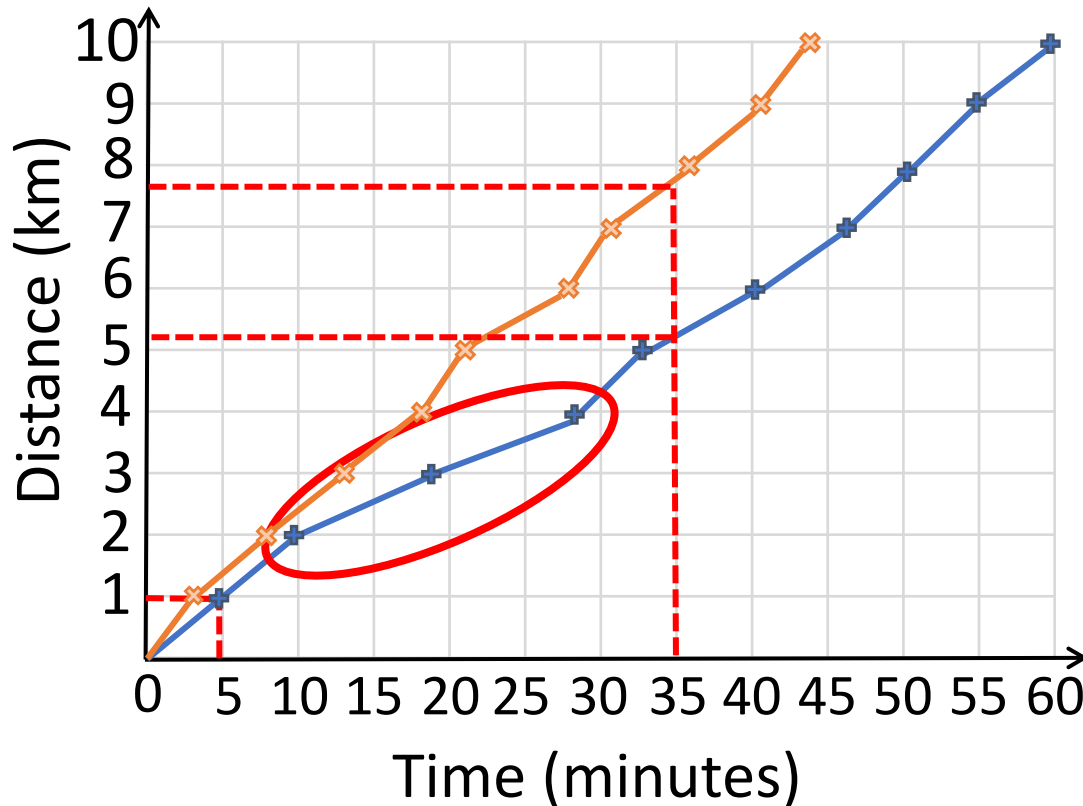
YOUR TURN

Have a go at questions
1 to 3 on the worksheet



Alex's run

Time (minutes)	4	10	19	28	33	41	47	56	55	69
Distance (km)	1	2	3	4	5	6	7	8	9	10



— = Alex
— = Mo

Have a think



After 35 minutes,
how much further
has Mo run than
Alex? **2.7 km**

$$\text{Mo} = 7.8 \text{ km} \quad \text{Alex} = 5.1 \text{ km} \quad 7.8 - 5.1 = 2.7 \text{ km}$$

YOUR TURN

Have a go at question 4 on
the worksheet

