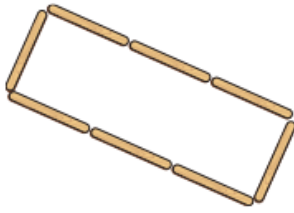


Monday Maths answers

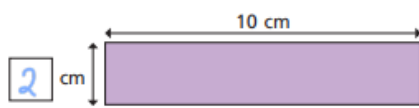
- 4 Each lolly stick is 8 cm long.
Find the perimeter of the shape.




64cm

- 5 Each of these rectangles has a perimeter of 24 cm.
Work out the missing lengths and label the diagrams.

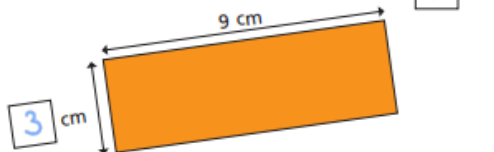
a)



c)



b)



What do you notice?

Find any other rectangles that have the same perimeter