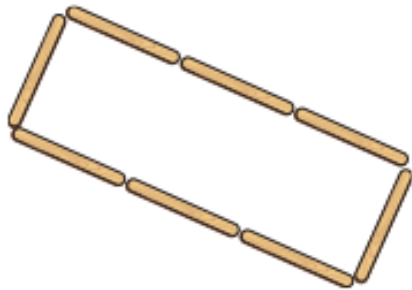
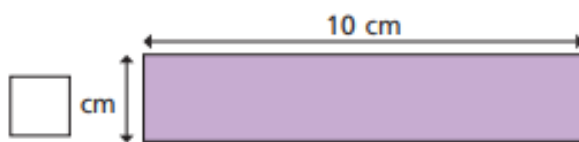


- 4 Each lolly stick is 8 cm long.
Find the perimeter of the shape.




- 5 Each of these rectangles has a perimeter of 24 cm.
Work out the missing lengths and label the diagrams.

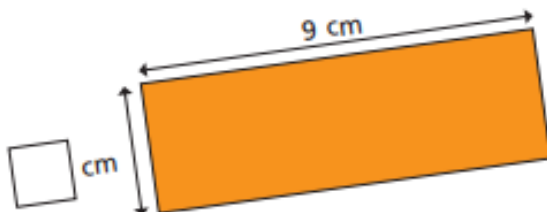
a)



c)



b)



What do you notice?