

Just to remind you - a quadrilateral is any shape with four side. So all the shapes below are quadrilaterals.

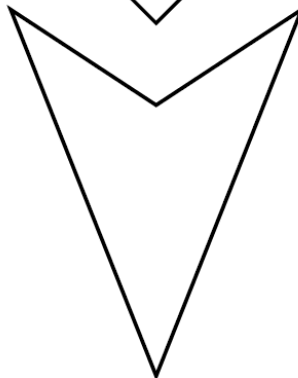
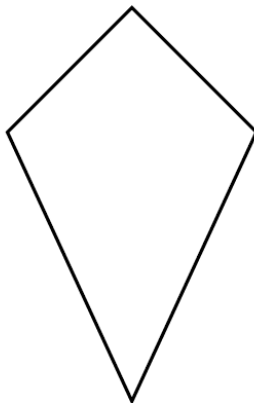
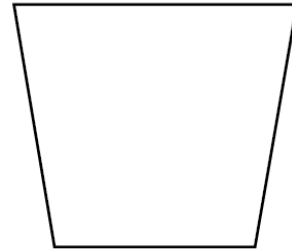
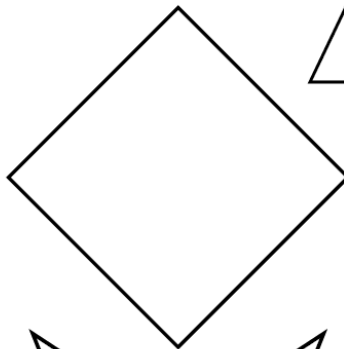



Right Angle Investigation

I can identify right angles.



Look at the quadrilaterals and then complete the true or false table.



Statement	True	False
All quadrilaterals have 4 right angles.		
All quadrilaterals have at least one right angle.		
All irregular quadrilaterals have no right angles.		

Just to remind you - a quadrilateral is any shape with four side. So all the shapes below are quadrilaterals.