







School Closure Daily Planning- Onyx Class – Wednesday 27th January

Reading	Writing	Mathemati CS	Topic
<p>Read through your text quickly. You can scan it today and not worry about reading every single word - just make sure you remember the main points.</p> <p>Your challenge is to summarise (explain in a quick way) what the text is about but you are only allowed to use a maximum of 20 words!</p> <p>Phonics: https://www.youtube.com/channel/UCo7fbLgY2oA_cFCIg9GdxtQ Please watch the videos of the day for <u>Set 3</u>.</p> <p>If your child does phonics lessons in school with Mrs Bishop, then please watch the <u>Set 2</u> videos, using the same link.</p>	<p>https://www.bbc.co.uk/teach/class-clips-video/history-social-studies-ks2-daily-life-in-ancient-egypt/zfhtscw</p> <p>Watch the video above about Daily Life in Ancient Egypt.</p> <p>What new information have you learnt from this video? Can you add more information to your notes from yesterday?</p>	<p>Watch the video of Mrs Bagnall introducing horizontal and vertical lines.</p>  <p>Identify the horizontal and vertical lines on the worksheet.</p>	<p><u>P.E.</u></p> <p>Chance to Shine cricket session https://us02web.zoom.us/j/6trD8tEtaS5h8aorDtp4jZyLdf1UBt?icsToken=98tyKuGvrTstH9aRtxGFRpwEA4igKO_zpilaj7dcr0rtWyFccCfjJrZICKtTFN6B</p> <p>This builds on from some of the cricket skills the children developed when Wiltshire Cricket came into school last term. You DO NOT need a cricket ball or bat for the lesson. The coaches will make suggestions about things that can be used from home (like rolled up socks for a ball and saucepans for bats).</p> <p>Or</p> <p>9.00 am Joe Wicks workout https://www.youtube.com/channel/UCAxW1XT0iEJo0TYIRfn6r</p> <p><u>Y</u></p>



		<p>I</p> <p>A  B </p> <p>E  F  G </p> <p>TASK A</p> <ol style="list-style-type: none">1. Which shapes have 1 or more horizontal lines?2. Which shapes have 1 or more vertical lines?3. How many vertical lines does D have? 4 have 24. How many horizontal lines does B have? 2 have 15. Which shapes have both a vertical and a horizontal line?6. Which shapes have only 2 horizontal lines?	
--	--	-------------------------------------------------------------------------------------------------------------------------------------------------------------------------------------------------------------------------------------------------------------------------------------------------------------------------------------------------------------------------------------------------------------------------------------------------------------------------------------------------------------------------------------------------------------------------------------------------------------------------------------------------------------------------------------------------------------------------------------------------------------------------------------------------------------------------------------------------------------------------------------------------	--

