

Find the difference

1 Teddy and Annie each have some money.

a) Teddy has this money.



How much money does Teddy have?

 p

b) Annie has this money.



How much money does Annie have?

 p

c) How much more money does Annie have than Teddy?


How did you work this out?



2 Rosie has this money.

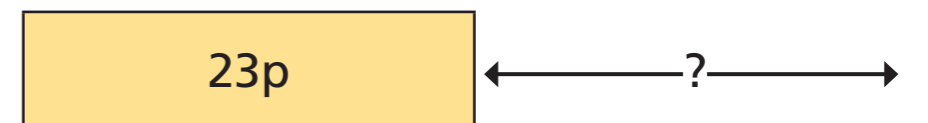
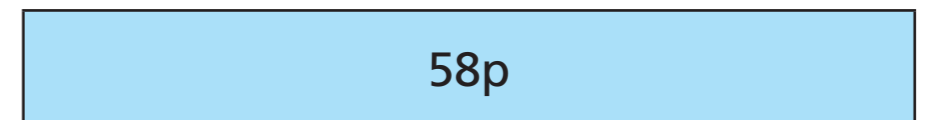


She wants to buy this packet of sweets.



How much more money does Rosie need?


3 Work out the difference between the cost of a bottle of water and a lollipop.







4 Dora and Mo each have some money.



Dora

I have two £10 notes
and three £1 coins.

I have one £20
note, one £5 note and
two £2 coins.



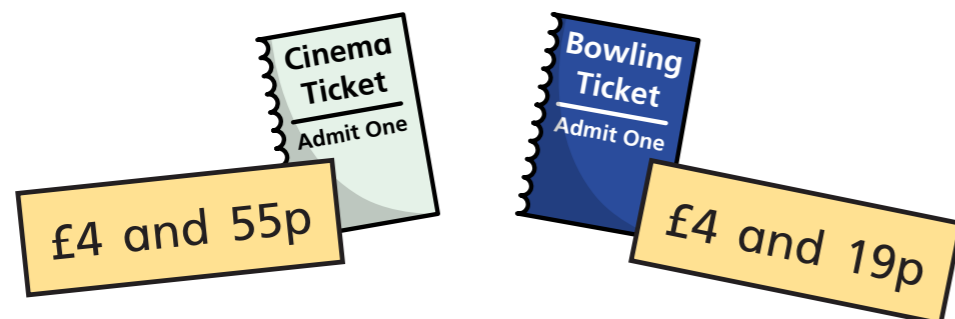
Mo

Who has more money? _____

How much more money do they have?



5 Jack has been to the cinema and bowling.



How much more did Jack spend to go to the
cinema than to go bowling?

6 Esther has £3 and 67p.

Nijah has £3 and 15p.

Brett has £8 and 67p.

a) Who has the most money? _____

b) How much more money does Esther have
than Nijah?

c) How much more money does Brett have
than Esther?

7 Tom and Whitney each have £5 and 84p.

a) Tom spends some money.

Now he has £5 and 7p.

How much did Tom spend?

b) Whitney also spends some money.

Now she has £5 and 23p.

How much more did Tom spend than
Whitney?

