




School Closure Daily Planning- Garnet class

	Reading	Writing	Mathematics	Topic																																									
<p>Monday 22/06/ 20</p>	<p>Read the Poem What am I like? Can you learn it off by heart and come up with some actions to perform to a member of your family?</p>	<p>Choose a different column from your Year 3 / 4 spelling list and do one of the following activities:</p> <ul style="list-style-type: none"> <li>• Rainbow write</li> <li>• Say, look, cover, write, check</li> <li>• Put into sentences/paragraph</li> <li>• Find and write the dictionary definitions</li> <li>• Make up a word search/ crossword</li> </ul> <p>Challenge: ask someone to test you on the spellings you have learned so far.</p>	<p>Watch how much have I spent using the link below <a href="https://www.bbc.co.uk/bitesize/topics/z8yv4wx/articles/zs3b2nb">https://www.bbc.co.uk/bitesize/topics/z8yv4wx/articles/zs3b2nb</a></p> <p>Scroll down and try the challenges and then complete the maths challenge sheet At the Café</p>  <p><b>At the Beach Café</b></p> <p>Use the Beach Café menu to work out how much each customer has spent.</p> <table border="1"> <thead> <tr> <th colspan="3">Menu</th> </tr> </thead> <tbody> <tr> <td>Coke</td> <td>60p</td> <td>Small chips</td> <td>£1.50</td> </tr> <tr> <td>Lemonade</td> <td>60p</td> <td>Large chips</td> <td>£2.50</td> </tr> <tr> <td>Tea</td> <td>80p</td> <td>Ice cream</td> <td>£1.20</td> </tr> <tr> <td>Coffee</td> <td>£1</td> <td>Pizza</td> <td>£3.00</td> </tr> <tr> <td>Ham sandwich</td> <td>£2.30</td> <td></td> <td></td> </tr> </tbody> </table> <table border="1"> <thead> <tr> <th>Table 1</th> <th>Table 2</th> <th>Table 3</th> </tr> </thead> <tbody> <tr> <td>Coke _____</td> <td>Tea _____</td> <td>2 x Tea _____</td> </tr> <tr> <td>Ice cream _____</td> <td>Coffee _____</td> <td>Large chips _____</td> </tr> <tr> <td>Total _____</td> <td>Pizza _____</td> <td>Total _____</td> </tr> <tr> <td></td> <td>Ham sandwich _____</td> <td></td> </tr> <tr> <td></td> <td>Total _____</td> <td></td> </tr> </tbody> </table> <p><b>Easier challenge</b></p> 	Menu			Coke	60p	Small chips	£1.50	Lemonade	60p	Large chips	£2.50	Tea	80p	Ice cream	£1.20	Coffee	£1	Pizza	£3.00	Ham sandwich	£2.30			Table 1	Table 2	Table 3	Coke _____	Tea _____	2 x Tea _____	Ice cream _____	Coffee _____	Large chips _____	Total _____	Pizza _____	Total _____		Ham sandwich _____			Total _____		 <p><b>Round one - Numbers</b></p> <ol style="list-style-type: none"> <li>1. How many sides does a heptagon have?</li> <li>2. How many strings does a violin have?</li> <li>3. How many years are there in a millennium?</li> <li>4. How many holes are there in a standard ten pin bowling ball?</li> <li>5. How many pockets does a snooker table have?</li> <li>6. How many hours are there in 3 days?</li> </ol> <p><b>Round two - General Knowledge</b></p> <ol style="list-style-type: none"> <li>1. What is the largest brass instrument in an orchestra?</li> <li>2. In which country would you find the Pyramids?</li> <li>3. What is H<sub>2</sub>O commonly known as?</li> <li>4. What is the name of the invisible line that runs round the middle of the earth?</li> <li>5. Which is the largest planet in the solar system?</li> <li>6. What are the three primary colours?</li> </ol> <p><b>Round three - Films</b></p> <ol style="list-style-type: none"> <li>1. What is the name of the Snowman in the film 'Frozen'?</li> <li>2. What sort of animal is the video game character 'Sonic'?</li> <li>3. In 'The Jungle Book' what kind of animal is 'Baloo'?</li> <li>4. What magical item does Aladdin use to fly on?</li> <li>5. What is the name of Harry Potter's pet owl?</li> <li>6. Pongo and Perdita appear in which animal film?</li> </ol> <p><b>Round Four - Animals</b></p> <ol style="list-style-type: none"> <li>1. What sort of creature is a 'dingo'?</li> <li>2. What is the name given to an animal that only eats plants?</li> <li>3. What colour is a giraffe's tongue?</li> <li>4. What food makes up nearly all of a giant panda's diet?</li> <li>5. What is the largest type of 'big cat' in the world?</li> <li>6. What is the fastest land animal in the world?</li> </ol> <p>PE activity (additional) Chose an activity to try from this website <a href="https://imoves.com/the-imovement">https://imoves.com/the-imovement</a></p>
Menu																																													
Coke	60p	Small chips	£1.50																																										
Lemonade	60p	Large chips	£2.50																																										
Tea	80p	Ice cream	£1.20																																										
Coffee	£1	Pizza	£3.00																																										
Ham sandwich	£2.30																																												
Table 1	Table 2	Table 3																																											
Coke _____	Tea _____	2 x Tea _____																																											
Ice cream _____	Coffee _____	Large chips _____																																											
Total _____	Pizza _____	Total _____																																											
	Ham sandwich _____																																												
	Total _____																																												



## Websites for additional work:

Extra learning <https://www.bbc.co.uk/bitesize/tags/z63tt39/year-4-and-p5-lessons/1>

Coding <https://scratch.mit.edu/>

Explore the human body <http://www.tenalpscommunicate.com/clients/siemens/humanbodyOnline/>