






School Closure Daily Planning- **Crystal** Class

DATE	Reading	Writing	Mathematics	Topic
<p>Thursday 30.4.20</p>	<p>Answer the questions related to the text – The Hero Twins.</p> <p style="text-align: right;">The Hero Twins</p> <p style="text-align: center;"><b>Questions</b></p> <ol style="list-style-type: none"> <li>1. What is the royal title? _____</li> <li>2. Why did Pagan roll his eyes to be the descendants of the Hero Twins? Explain your answer fully. _____ _____</li> <li>3. How did Pagan avoid which enemies called upon or under the go. _____</li> <li>4. Why do you think the Lords of Death gave up to the ruler of the town playing ball? Explain your answer fully. _____ _____</li> <li>5. What is the father of the hero and the hero? Write one. <input type="radio"/> He was Hunabku <input type="radio"/> A Lord of Death <input type="radio"/> One Hunabku <input type="radio"/> A Mayan prisoner</li> <li>6. Fill in the missing words. They also refused to sit on the _____, but that their father and would not personally _____ them in on.</li> </ol>	<p>Research – Who do you think had the best lifestyle in Mayan times?</p> <p>Who had the worst?</p> <p>Why do you think this?</p> <p>You can decide how you present your information.</p>	<p style="text-align: center;"><b>All</b></p> <p><a href="https://resources.whiterosemaths.com/wp-content/uploads/2020/03/Y4-Summer-Block-2-WO2-Ordering-money-2020.pdf">https://resources.whiterosemaths.com/wp-content/uploads/2020/03/Y4-Summer-Block-2-WO2-Ordering-money-2020.pdf</a></p>  <p style="text-align: center;"><b>Challenge</b></p> <p>2 Horrible Histories magazines cost £4.70.</p> <ul style="list-style-type: none"> <li>• How much does each magazine cost?</li> </ul>	<p>The choice is yours:</p> <p>Art continued – Create a Jungle/rainforest collage.</p> <p>Computing/DT continued – design a Mayan settlement and place of workshop using software like Minecraft, or a 2D or 3D settlement using paper and empty Easter egg boxes.</p>



	<p style="text-align: right;">The Hero Twins</p> <p>7. Explain how the lords of death's plan to kill Hrothgar and Xhalanga is defeated.</p> <p>_____</p> <p>_____</p> <p>_____</p> <p>8. According to Pagan mythology, who was turned into the Pagan god? Tick one.</p> <p><input type="radio"/> Xhalanga</p> <p><input type="radio"/> Xam Hrothgar</p> <p><input type="radio"/> The prisoners</p> <p><input type="radio"/> The Hrothgar</p> <p style="text-align: right;">   </p>		<p>Lewis went to the shop and bought 1 magazine, and 2 packets of biscuits, at 65p per packet.</p> <ul style="list-style-type: none"> <li>• How much does he spend altogether?</li> </ul> <p>Mia just loves swimming, and she bought some new goggles at £9.70, and a swimming hat for £2.55. When she took them to the till, the goggles were half price. How much did Mia's swimming goggles and hat cost?</p> <p>Josh paid £8.70 for 2 pairs of new football socks.</p> <ul style="list-style-type: none"> <li>• How much does each pair cost?</li> <li>• How many pairs of socks could Josh buy if he had a £20 note?</li> </ul> <p>Adult train tickets from Nottingham to Birmingham cost £11.20 for a single journey. Children's tickets cost £8.40.</p> <ul style="list-style-type: none"> <li>• How much would an adult's return journey ticket cost?</li> <li>• How much would it cost for 1 single adult, and 2 single children's tickets?</li> </ul>	
--	--	--	---	--



			<p>Miss Mitchell bought 3 bags of sweets and 1 packet of lollies to fill up Class 4's sweetie tin! The bags cost £2.36, and the lollies cost £1.26. How much did Miss Mitchell spend altogether?</p> <p>A child's ticket to the cinema costs £6.65, whilst an adults costs £9.75.</p> <ul style="list-style-type: none"><li>• How much more does an adult ticket cost?</li><li>• How much would it cost for 2 adults and 2 children to go to the cinema?</li></ul>	
--	--	--	--	--

Websites for additional work: